




Pelaporan aktiviti di laman web JMSK


SESI DISEMBER 2019

UNIT MATEMATIK

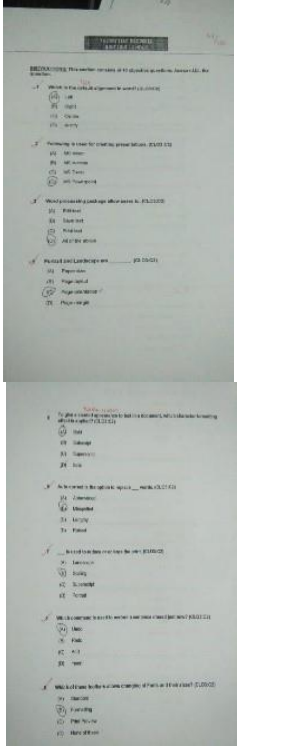
BIL	AKTIVITI	TARIKH	GAMBAR
1.	Rakan Pembimbing Matematik	16 Disember 2019 - 20 Mac 2020	
2.	Program Ujian Percubaan Dbm 10102	05 Mac 2020	

			
3.	Klinik Trigonometri dan Nombor kompleks	28 Feb 2020	
4.	Progressive Exercise Workshop	9 - 12 Mac 2020	


UNIT SAINS


BIL	AKTIVITI	TARIKH	GAMBAR
1.	PSR TVET PMM 2020	22, 23 & 27.02.2020	
2.	Rakan Pembimbing Sains	Sepanjang semester	
3.	Program Pembangunan & Kecemerlangan Pelajar Pra Diploma Sains	04.01.2019	
4.	PSR TVET PMM 2020	22, 23 & 27.02.2020	
5.	Science Edu-Game	W14 (23 Mac 2020 – 27 Mac 2020)	Tidak dapat dilaksanakan kerana PKP

UNIT KOMPUTER

BIL	AKTIVITI	TARIKH	GAMBAR
1.	Revision Theory Test	W13 (16 Mac 2020 – 20 Mac 2020)	 <p>The top photograph shows a student's revision theory test paper with several multiple-choice questions. The questions are:</p> <ul style="list-style-type: none"> 1. Which of the following is not a type of network? <ul style="list-style-type: none"> A. LAN B. WAN C. MAN D. VPN 2. Which of the following is not a type of network? <ul style="list-style-type: none"> A. LAN B. WAN C. MAN D. VPN 3. Which of the following is not a type of network? <ul style="list-style-type: none"> A. LAN B. WAN C. MAN D. VPN 4. Which of the following is not a type of network? <ul style="list-style-type: none"> A. LAN B. WAN C. MAN D. VPN 5. Which of the following is not a type of network? <ul style="list-style-type: none"> A. LAN B. WAN C. MAN D. VPN 6. Which of the following is not a type of network? <ul style="list-style-type: none"> A. LAN B. WAN C. MAN D. VPN 7. Which of the following is not a type of network? <ul style="list-style-type: none"> A. LAN B. WAN C. MAN D. VPN 8. Which of the following is not a type of network? <ul style="list-style-type: none"> A. LAN B. WAN C. MAN D. VPN 9. Which of the following is not a type of network? <ul style="list-style-type: none"> A. LAN B. WAN C. MAN D. VPN 10. Which of the following is not a type of network? <ul style="list-style-type: none"> A. LAN B. WAN C. MAN D. VPN <p>The bottom photograph shows two male students sitting at a desk in a classroom, smiling at the camera. They are wearing blue shirts and appear to be in a computer lab or classroom setting.</p>

PRA DIPLOMA SAINS

BIL	AKTIVITI	TARIKH	GAMBAR
1.	RPMaths & RPSains	Sepanjang semester	 <p>The 'GAMBAR' column contains four photographs arranged vertically. The top photo shows a computer lab with students at desks. The second photo shows a lecture hall with students at desks. The third photo shows another view of the computer lab. The bottom photo shows a lecture hall with students at desks.</p>

			
2.	Go To Diploma: Part 2	W15 dilaksanakan secara online disebabkan PKP	
3.	Majlis Pra Graduan	belum dilaksanakan kerana PKP	