



BASIC

DC POWER SUPPLY



Norhafiza binti Sharom
Fauziah binti Aliman
Lian Ai Chen

BASIC

DC POWER SUPPLY

Norhafiza binti Sharom

Fauziah binti Aliman

Lian Ai Chen

First Edition 2024
©Politeknik Merlimau, 2024

All rights reserved. No part of this publication may be reproduced, distributed, or transmitted in any form or by any means, including photocopying, recording, or other electronic or mechanic methods, without the prior written permission of the writer, except in the case of brief quotations embodied in reviews and specific other non-commercial uses.

NORHAFIZA BINTI SHAROM
FAUZIAH BINTI ALIMAN
LIAN AI CHEN

Published by:
Politeknik Merlimau Melaka
Kementerian Pendidikan Tinggi,
77300 Merlimau Melaka.

Tel: 06-2636687
Fax: 06-2636678
Website: <http://www.pmm.edu.my>

EDITORIAL BOARD

Managing Editor:

Zurida binti Yaacob
Nurul Aqilah binti Johar
Mazlinda binti Ithnin

Editor:

Ts. Rodzah binti Hj. Yahya

Proofreading & Language Editing:

Putra Shazly bin Rosman

ACKNOWLEDGEMENT

We would like to express our heartfelt gratitude to everyone who contributed to the creation of this eBook on basic DC power supplies. This collaborative effort would not have been possible without the support and guidance of many individuals. Your constructive criticism and support enhanced the clarity and quality of our work.

Special thanks go to our families and friends for their patience and understanding during the countless hours we dedicated to this project. Your encouragement and belief in us kept us motivated.

Thank you

PREFACE



This e-book on Basic DC Power Supply covers the fundamental principles of designing DC power supply circuits. It is organized into five key components: Transformer, Rectifier, Filter, Regulator, and Voltage Divider. The e-book stands out for its clear and concise text, designed to be easily understood and referenced by students and readers. It includes illustrations that relate directly to the topics discussed, providing a visual context to enhance comprehension.

We hope this e-book proves to be a valuable resource for students and general readers alike, contributing to a deeper understanding of DC power supplies.



Table Of Content

1

Introduction

1

2

Block 1 : Transformer

7

3

Block 2 : Rectifier

15

4

Block 3 : Filter

24

5

Block 4 : Regulator

40

6

Block 5 : Voltage Divider

54

7

Question

60

8

Video Simulation

61

9

Reference

62



Introduction

DC Power Supply

Introduction to DC Power Supply



GET ANSWER



Introduction to DC Power Supply

A DC power supply converts alternating current (AC) from the mains into direct current (DC) suitable for powering electronic devices. It typically consists of several key components, including a transformer, rectifier, filter, voltage regulator, and voltage divider.



Scan me for voice

Components of a DC Power Supply

AC Input -> Transformer -> Rectifier -> Filter -> Voltage Regulator -> Voltage Divider -> DC Output



Transformer




Rectifier



Filter



Voltage
Regulator



Voltage
Divider

Components of a DC Power Supply

Transformer

Steps down the input AC voltage to a lower level suitable for rectification.

Rectifier

Converts AC to pulsating DC by allowing current to flow in one direction only. Common rectifier types include diode bridges or more complex rectifier circuits.

Filter

Smooths the pulsating DC output from the rectifier, **reducing ripple voltage** and making the output more stable.

Voltage Regulator

Ensures that the output voltage remains **constant** despite fluctuations in input voltage or load changes. This can be achieved through various types of voltage regulation circuits, such as linear regulators or switching regulators.

Voltage Divider

Divides DC voltage to several voltages

Tutorial

No. 1

1. What is the function of a DC Power Supply?
2. Identify the function of a voltage regulator in DC Power Supply.
3. Based on Figure 1, name the block of 'P' and 'R'.

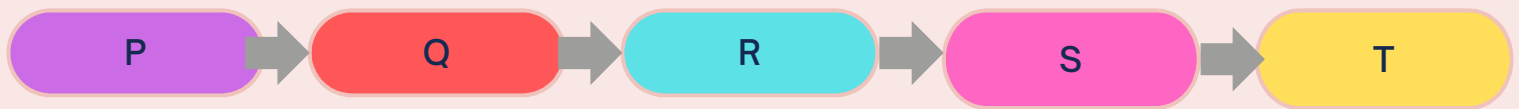


Figure 1



Tutorial Answer

1. The function of a DC Power Supply is to convert alternating current (AC) from the mains into direct current (DC)
2. The voltage regulator is used to maintain the DC output voltage.
3. 'P' is transformer and 'R' is filter.





Block 1



Transformer

DC Power Supply



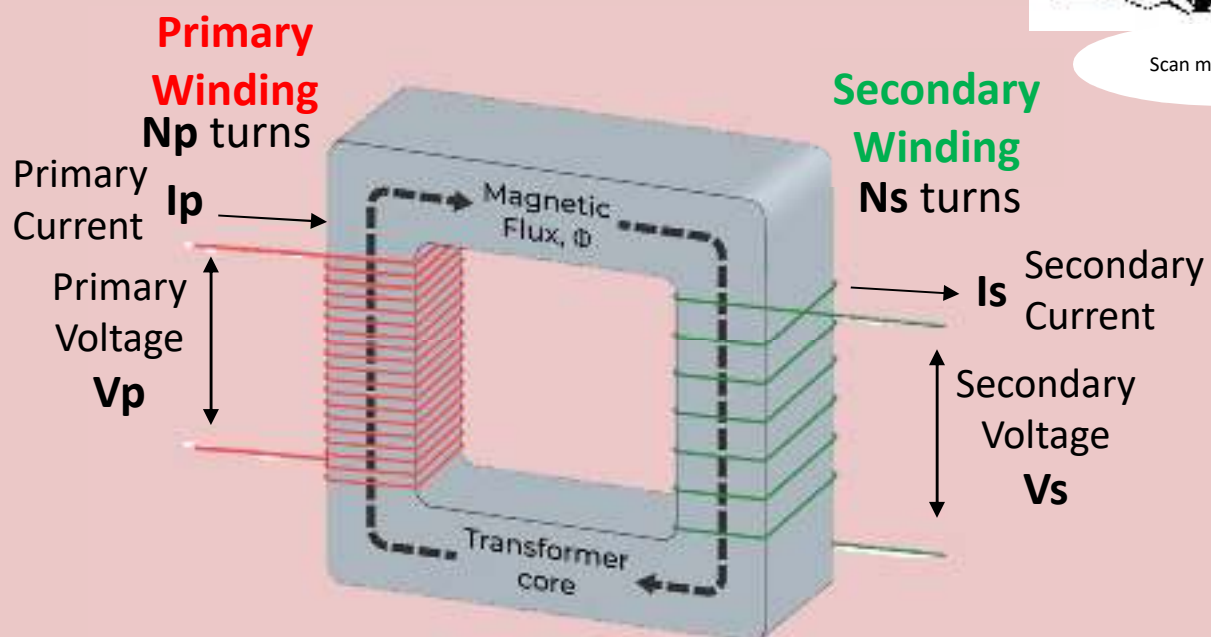
Transformer

A basic transformer is defined as a passive electrical device constructed of two coils of wire (winding) magnetically coupled that transfers electrical energy from one coil to another through the process of electromagnetic induction.

It is most commonly used to increase ('step up') or decrease ('step down') voltage levels between circuits

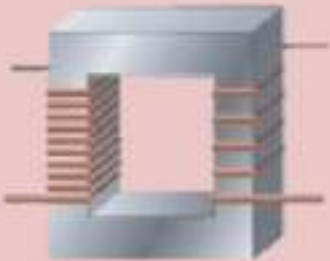


Scan me for voice



Transformer


Step-down



Operation

A transformer that decreases voltage between the primary to secondary windings is defined as a step-down transformer.

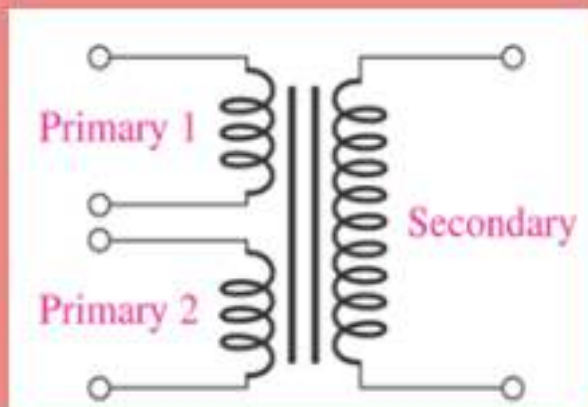
Step-up



Operation

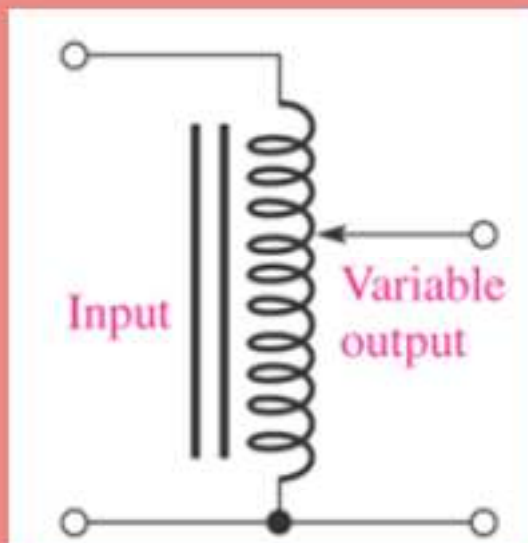
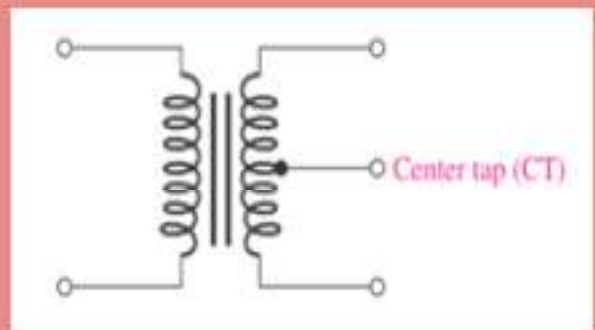
- A transformer that increases voltage between the primary to secondary windings is defined as a step-up transformer.

Types of Transformer



Multiple Winding

Center-tap
Transformer



Auto Transformer

Ratio Transformer

$$n = \frac{V_P}{V_S} = \frac{I_S}{I_P} = \frac{N_P}{N_S}$$



Function of the Transformer (Step down)

An electrical device that steps down alternating current (AC) voltage or current to a lower AC voltage or current.



1. By referring to Figure 1 below, determine the following:

- i. Secondary voltage
- ii. Secondary current

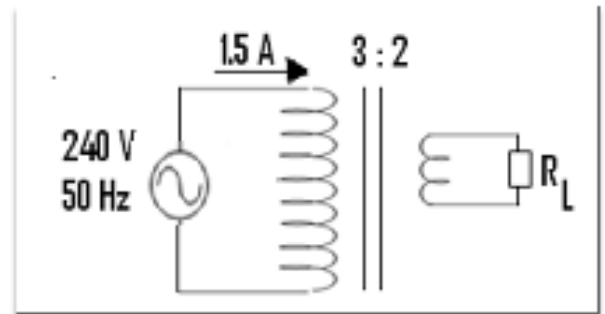


Figure 1

2. List THREE (3) types of transformer.
3. Explain the function of transformer in DC power supply.
4. By using the suitable diagram, sketch the basic transformer.
5. Show the equation of turn ratio using voltage value.

Tutorial Answer

1. Determine the following:

$$\textbf{i.} \quad \frac{V_P}{V_S} = \frac{N_P}{N_S}$$

$$\frac{240}{V_S} = \frac{3}{2}$$

$$\frac{V_S}{240} = \frac{2}{3}$$

$$V_S = \frac{2}{3} \times 240 \\ = 160 \text{ V}$$

$$\textbf{ii.} \quad \frac{I_S}{I_P} = \frac{N_P}{N_S}$$

$$\frac{I_S}{1.5} = \frac{3}{2}$$

$$I_S = \frac{3}{2} \times 1.5$$

$$= 2.25 \text{ A}$$

2. THREE (3) types of transformer.

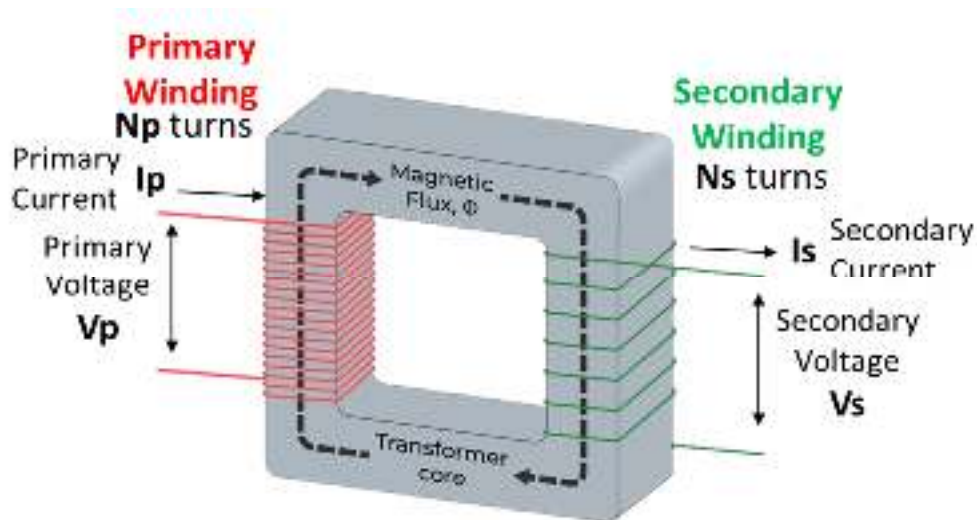
- i. Auto transformer
- ii. Center-tap transformer
- iii. Multiple winding transformer



Tutorial Answer

3. The function of transformer in DC power supply is to step down current or voltage AC to a smaller current or voltage AC.

4. Diagram of the basic transformer.



5. The equation of turn ratio using voltage value.

$$n = \frac{V_P}{V_S}$$



Block 2



Rectifier

DC Power Supply




Introduction to Rectifier

The rectifier is a crucial component in a DC power supply, responsible for converting alternating current (AC) input into pulsating direct current (DC).

This conversion is essential because most electronic devices require a steady DC voltage to operate.



Scan me for voice



Source: Canva

Function of the Rectifier

The primary function of the rectifier is to change the alternating voltage (AC) from the mains power source into direct voltage (DC). In other words, it converts the alternating current, which changes direction periodically, into a unidirectional current flow.

AC



DC pulsating



Types of Rectifiers

Half-Wave Rectifier

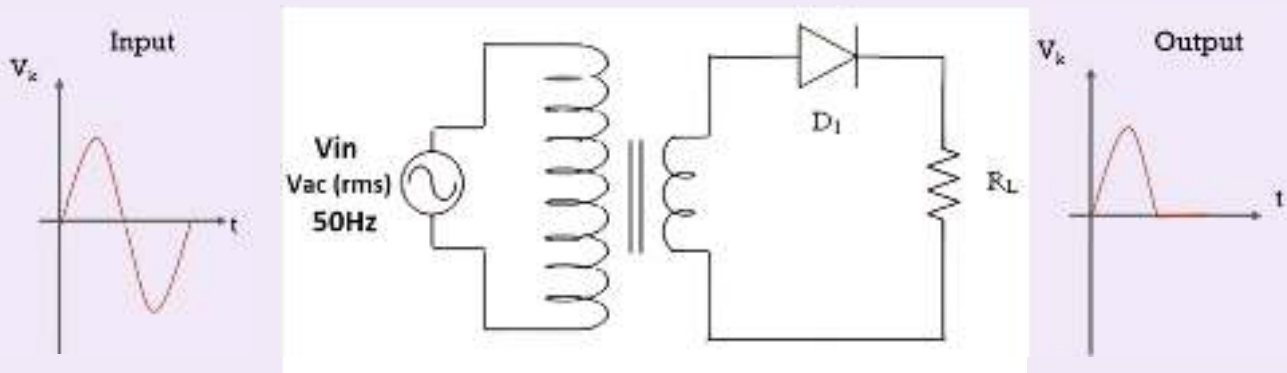
This simple rectifier uses a single diode to allow current flow in only one direction during half of the AC cycle. It's less efficient and produces more ripple compared to full-wave

Full-Wave Rectifier

Full-wave rectifiers use multiple diodes arranged in a bridge configuration (Bridge Rectifier) or center-tapped configuration to allow current flow in the same direction during both halves of the AC cycle. This results in a more efficient conversion with less ripple.

Types of Rectifiers

Half-Wave Rectifier



Operation

When the secondary AC voltage swings positive,

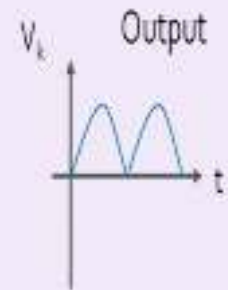

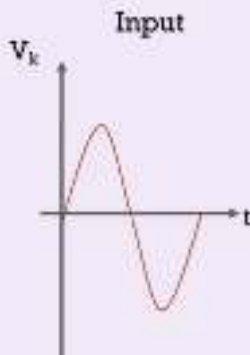
- Diode D_1 turns 'ON' and the circuit is connected.
- Current flows in the circuit and produces half waveform across the load

When secondary AC voltage swings negative,

- Diode D_1 turns 'OFF' and the circuit is opened
- No current flows in the circuit and NO waveform is produced across the load

Types of Rectifiers

Full-Wave Rectifier : Center-tapped

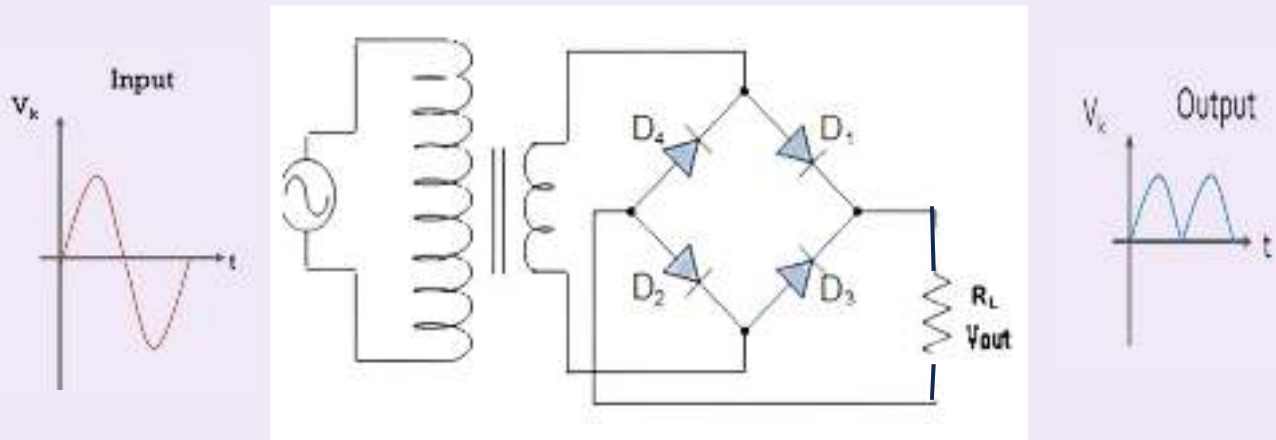


Operation

- When V_{in} swings positive, a positive voltage is developed on M so D1 is ON while a negative voltage is developed on N so D2 is OFF.
- Electrons flow through the load and develop a positive output half-cycle across the load (V_{out}).
- When V_{in} swings negative, a negative voltage is developed on M so D1 is OFF while a positive voltage is developed on N turning ON D2.
- Current flows through the load, developing another positive output half-cycle across the load (V_{out}).

Types of Rectifiers

Full-Wave Rectifier : Bridged Rectifier



Operation

- When the V_{in} swings positive, a positive potential is applied to the top of the bridge, causing D_1 to turn ON, while a negative potential is applied to the bottom of the bridge, causing D_2 to turn ON.
- With D_1 and D_2 ON and D_3 and D_4 OFF, current will flow up through the load as indicated by the arrow (I), developing a positive output half-cycle across the load (V_{out}).

- When V_{in} swings negative, a negative potential is applied to the top of the bridge, causing D_4 to turn ON, while a positive potential is applied to the bottom of the bridge, causing D_3 to turn ON.
- With D_4 and D_3 ON and D_1 and D_2 OFF, electrons will flow up through the load as indicated by the arrow (I), developing another positive output half-cycle across the load (V_{out}).

1. Identify the function of a rectifier.
2. The main function of the rectifier in the power supply unit is to convert the Alternating Current (AC) to Direct Current (DC) power. List TWO (2) types of rectifier circuits that are commonly used in this power supply unit. How many diodes are used in the rectifier circuit respectively?
3. Draw the input and output waveforms of half-wave rectifier.
4. Draw a bridge rectifier circuit and explain its operation.



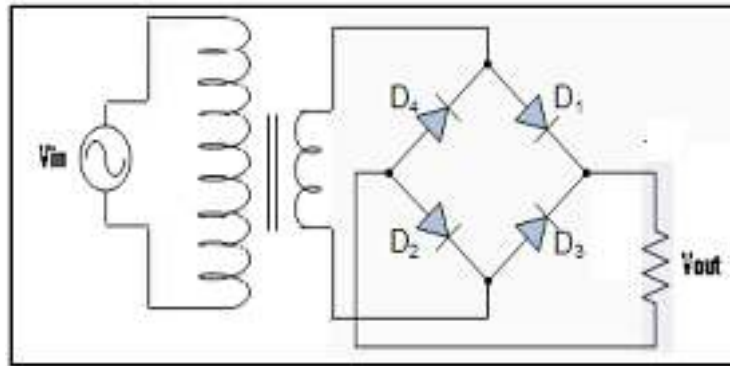
Tutorial Answer

1. The rectifier is used to convert the AC voltage to pulsating DC output voltage.
2. TWO (2) types of rectifier circuits and number of diodes are used in the rectifier circuit respectively:
 - Full wave rectifier using center tap transformer – use 2 diodes
 - Full wave rectifier using bridge rectifier – use 4 diodes
 - Half wave rectifier – use 1 diode
3. The input and output waveforms of half-wave rectifier.



Tutorial Answer

4. Bridge rectifier circuit



Operation:

- When the V_{in} swings positive, a positive potential is applied to the top of the bridge, causing D_1 to turn ON, while a negative potential is applied to the bottom of the bridge, causing D_2 to turn ON.
- With D_1 and D_2 ON and D_3 and D_4 OFF, current will flow up through the load as indicated by the arrow (I), developing a positive output half-cycle across the load (V_{out}).
- When V_{in} swings negative, a negative potential is applied to the top of the bridge, causing D_4 to turn ON, while a positive potential is applied to the bottom of the bridge, causing D_3 to turn ON.
- With D_4 and D_3 ON and D_1 and D_2 OFF, electrons will flow up through the load as indicated by the arrow (I), developing another positive output half-cycle across the load (V_{out}).



Block 3



Filter


DC Power Supply




Introduction of Filter

Filtering or smoothing the rectified voltage is used to obtain a pure DC from the pulsating DC.


Function of the Filter



To get smooth DC voltage from pulsating DC input



The small amount of fluctuation in the filter output voltage is called ripple.

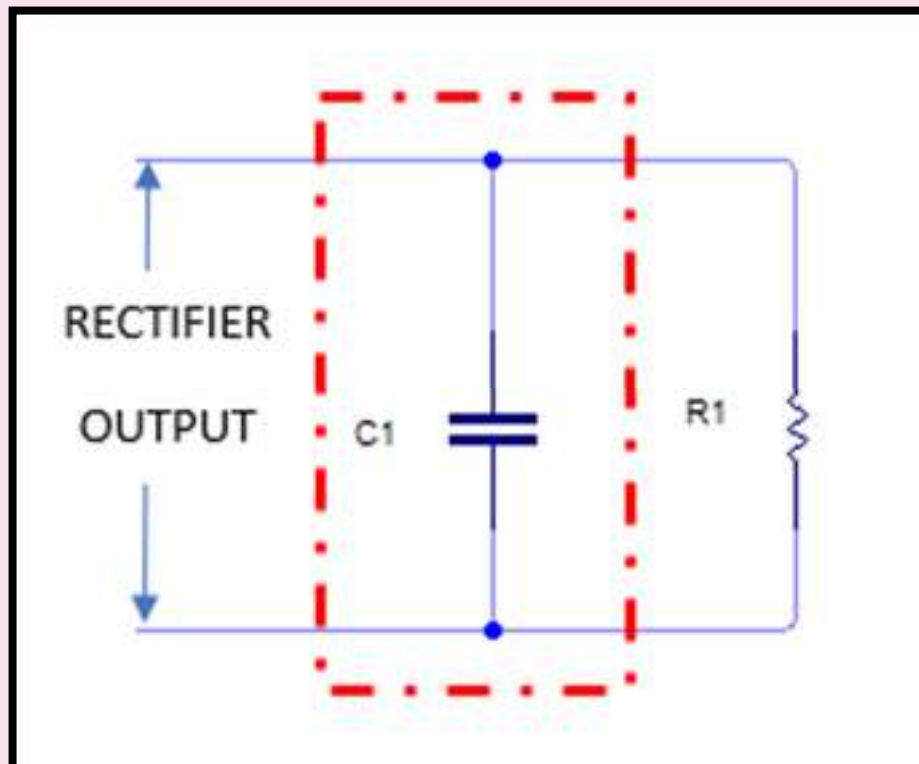


Removes the ac component from the output of rectifier and produces the pure dc output across the load

Types of Filter

Capacitor Filter

A capacitor, C is connected at the end of rectifier circuit and parallel with the load resistor.

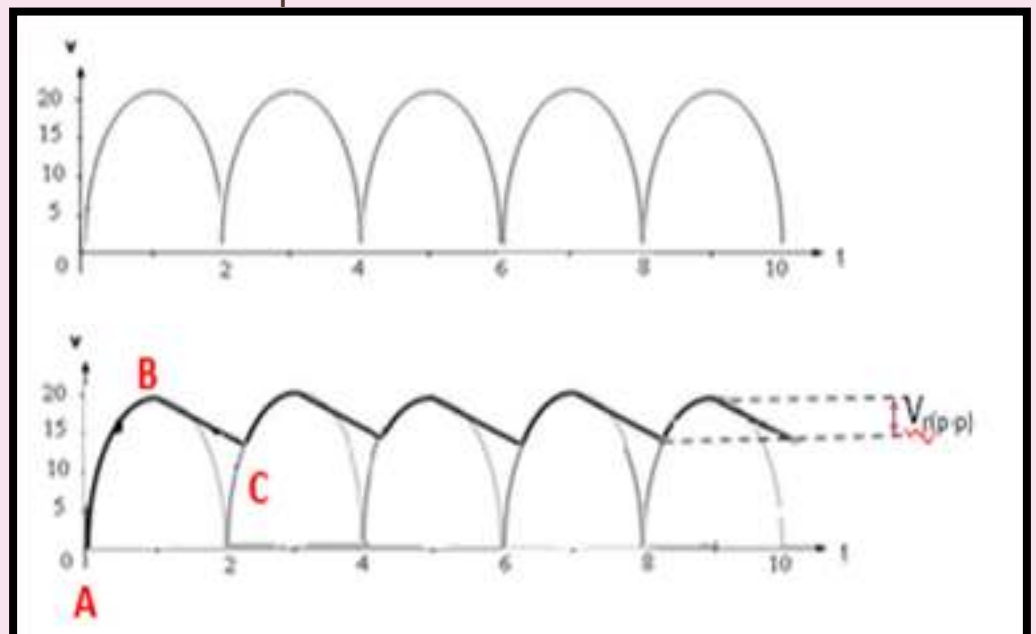


Types of Filter

Capacitor Filter

- When the voltage from the rectifier circuit increases, it charges the capacitor until the peak value V_m of the rectifier voltage (A – B).
- After that, the rectifier voltage starts to decrease causing the capacitor to discharge through the load and the voltage across it decreases (B-C).
- The process is repeated. The little ripple is left in the output.

Waveform output full wave rectifier



Waveform output c filter

Types of Filter

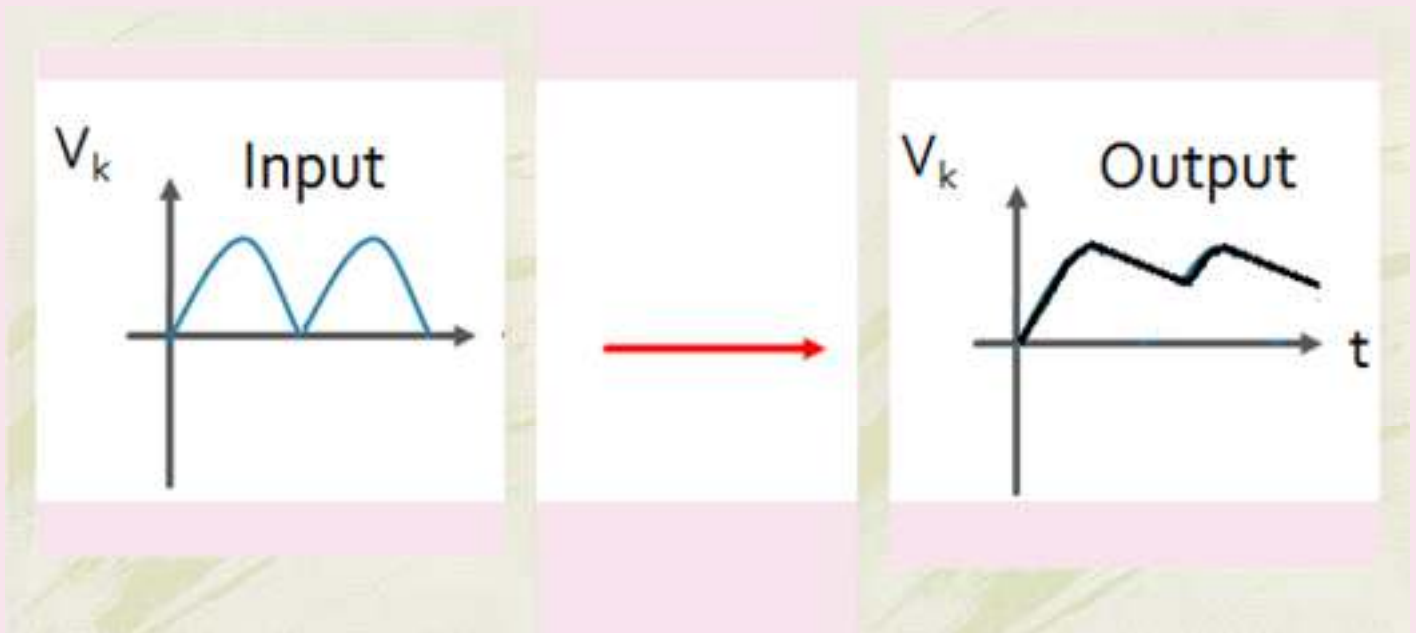
Capacitor Filter

- ✓ The larger valued capacitor is used, the ripple voltage becomes lesser.
- ✓ Popular because of its low cost, small size, lightweight and good characteristics.
- ✓ The disadvantage of this filter is the output voltage is not pure dc and has much less variation (or ripple) than the unfiltered output of the rectifier.

Types of Filter

Capacitor Filter

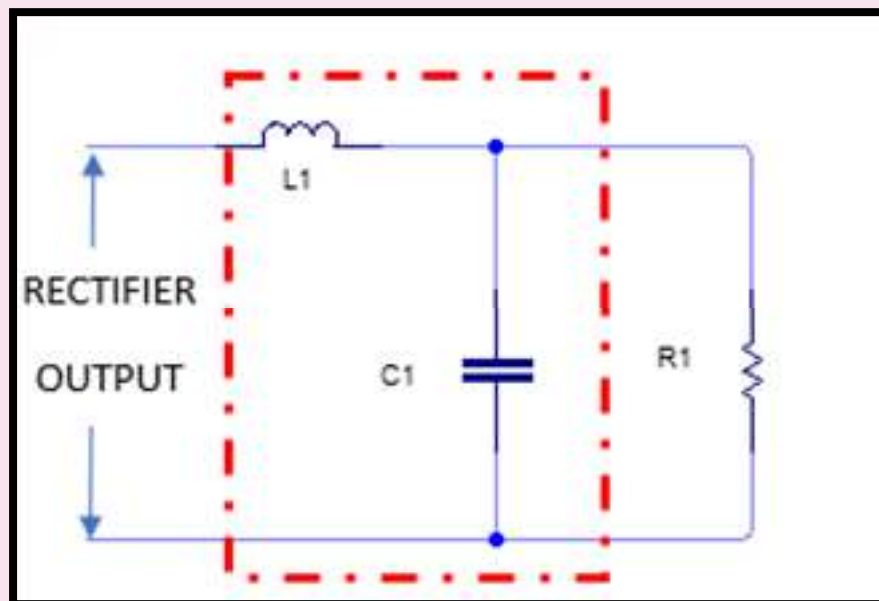
Waveform Input and Output



Types of Filter

Choke Input Filter

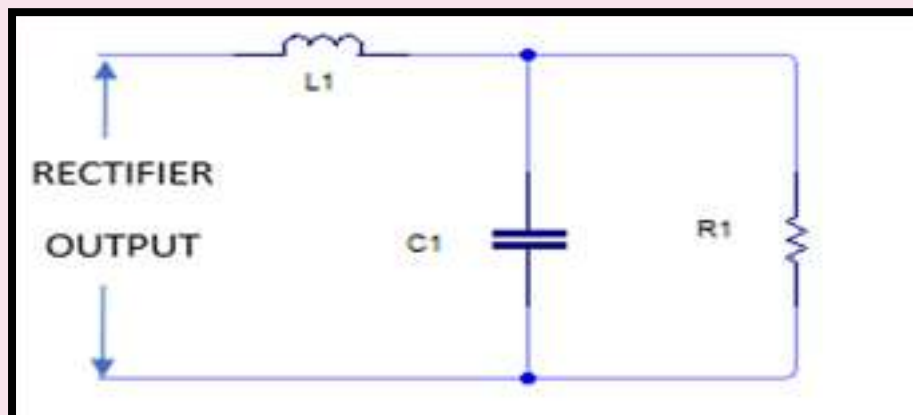
A choke L is connected in series with the rectifier circuit and a Capacitor filter across the load resistor



Types of Filter

Choke Input Filter

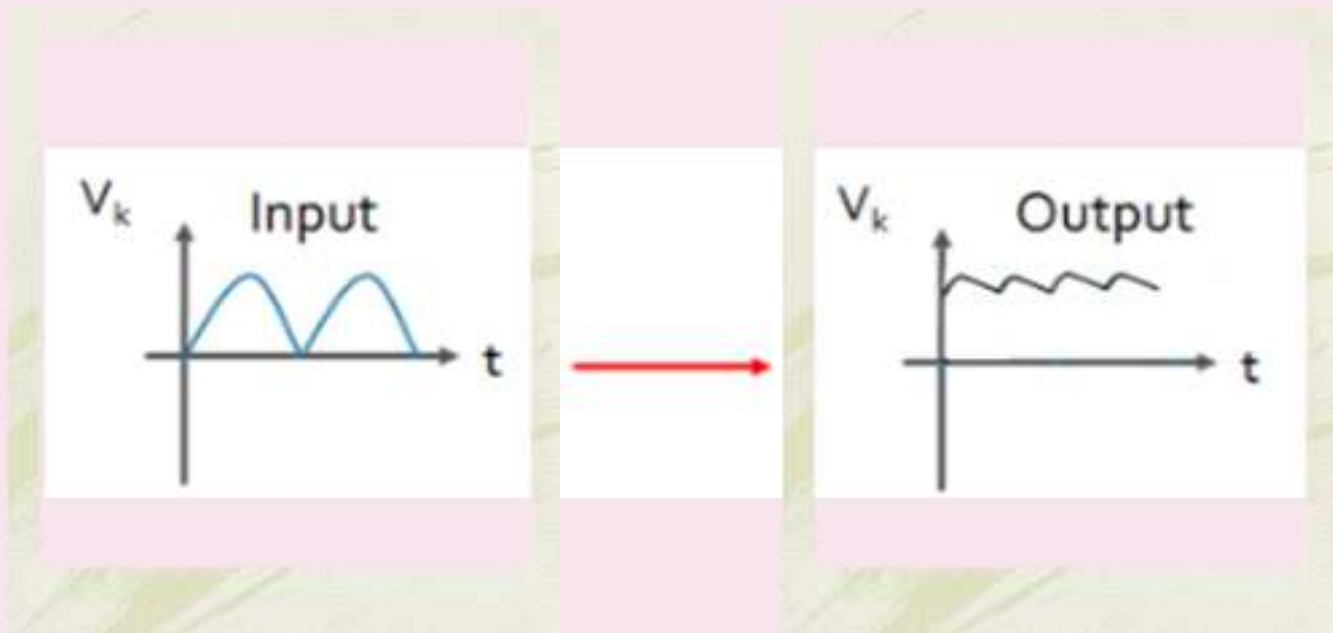
- The pulsating output from the rectifier circuit contains AC and DC components.
- The choke allow high opposition to the passage of AC component but blocking opposition to the DC component.
- The resulting AC component appears across the choke while the DC component passes through the choke to the load.
- It reduced pulsation across the load, R.



Types of Filter

Choke Input Filter

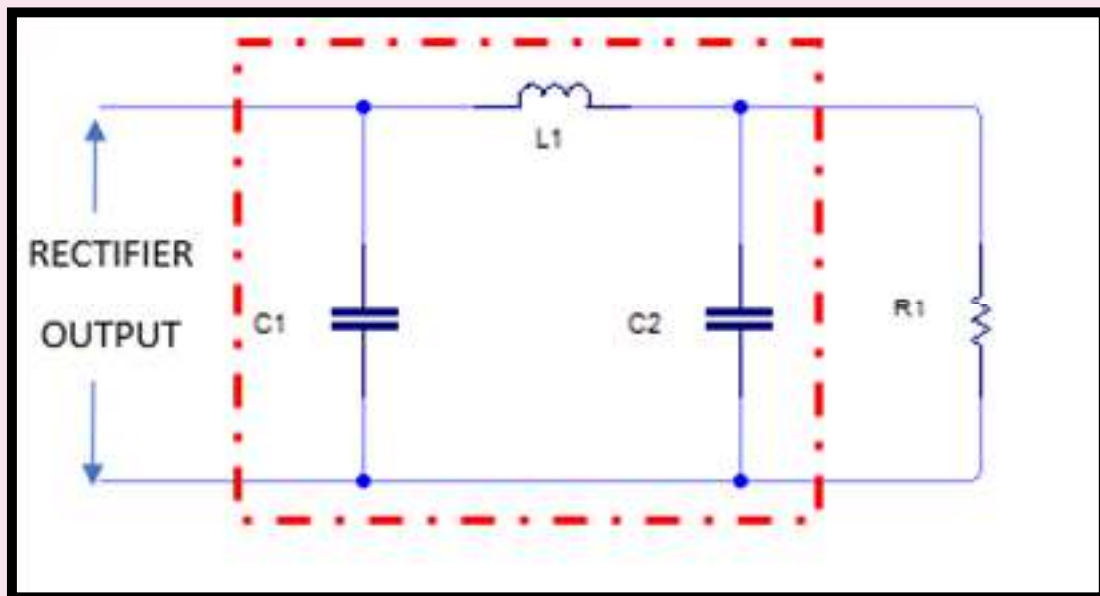
Waveform Input and Output



Types of Filter

Capacitor Input Filter Or Pi Filter

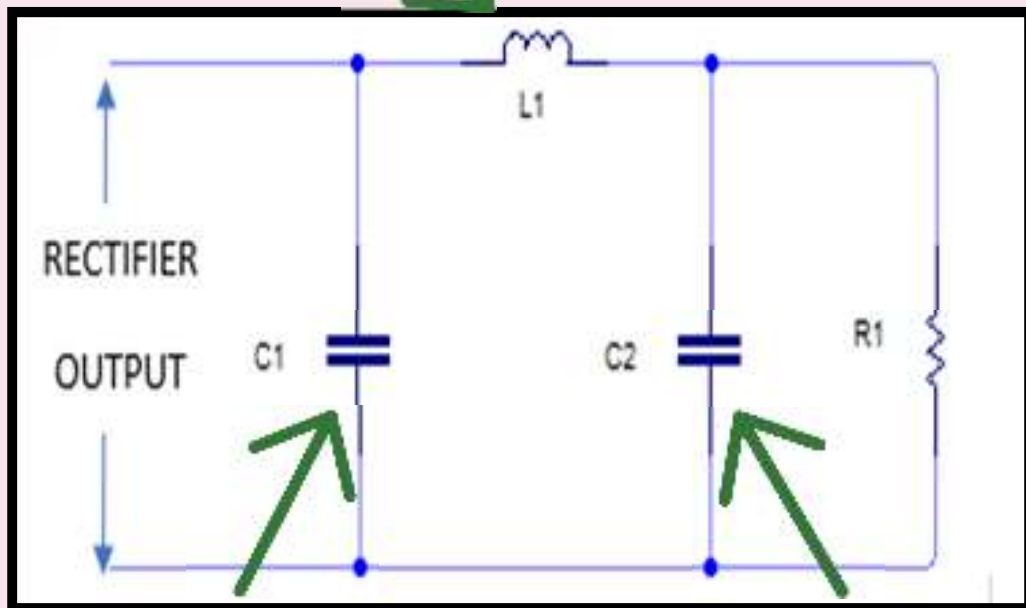
A filter capacitor C_1 connected across the rectifier output, a choke L in series and another filter capacitor C_2 connected across resistor as load



Types of Filter

Capacitor Input Filter Or Pi Filter

- Give high reactance to AC component of rectifier output
- Give zero reactance to DC component



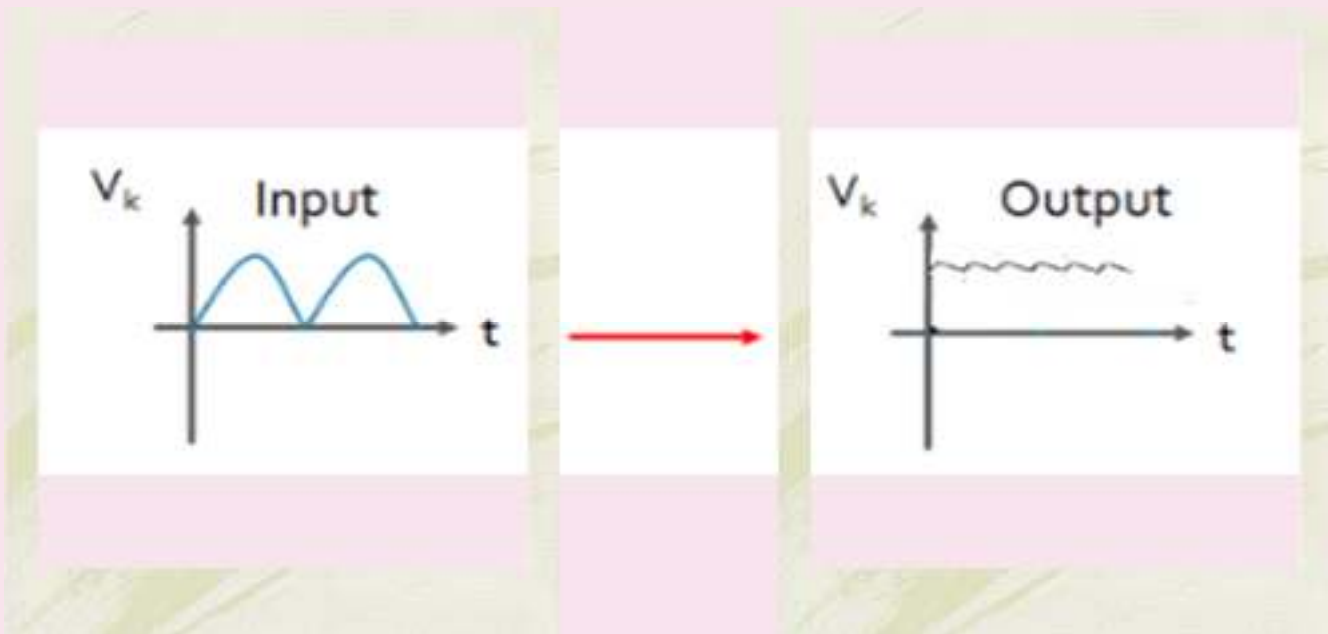
- Give low reactance to AC component of rectifier output.
- Give infinite reactance to DC component

Only DC component appears across the load

Types of Filter

Capacitor Input Filter
Or
Pi Filter

Waveform Input and Output



1. List THREE (3) types of filter.
2. By using the diagram, explain the pi filter.
3. Explain the function of filter.
4. Draw the input and output waveforms of filter.
5. Explain the operation of capacitor filter.

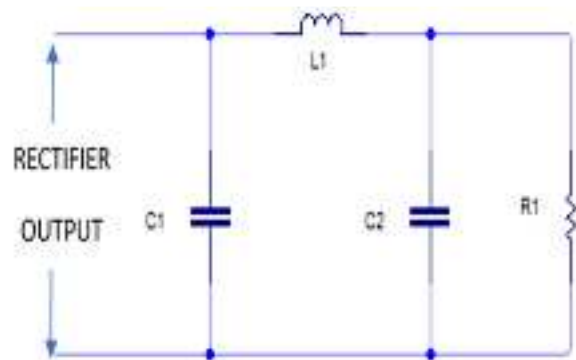


1. THREE (3) types of filter.

- a) C filter
- b) Choke Input Filter
- c) C input filter or pi filter

2. The pi filter

A filter capacitor C_1 connected across the rectifier output, a choke L in series and another filter capacitor C_2 connected across resistor as load



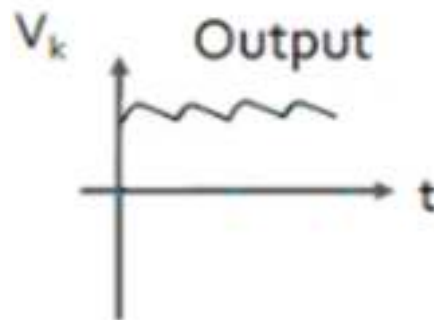
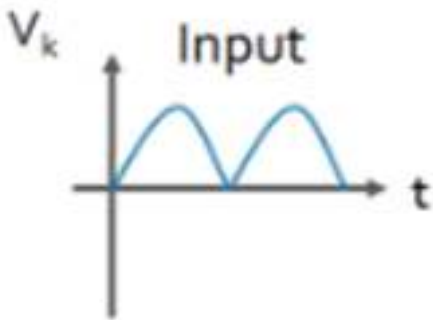
answer

Tutorial Answer

No. 4

3. The function of filter is to get smooth DC voltage called ripple from pulsating DC input

4. The input and output waveforms of filter



Source: pixabay



5. The operation of capacitor filter.

When the voltage from rectifier circuit increases, it charges the capacitor until the peak value V_m of the rectifier voltage. After that, the rectifier voltage starts to decrease causing the capacitor to discharge through the load and the voltage across it decreases. The process is repeated. The little ripple is left in the output.



Source: pixabay



Block 4



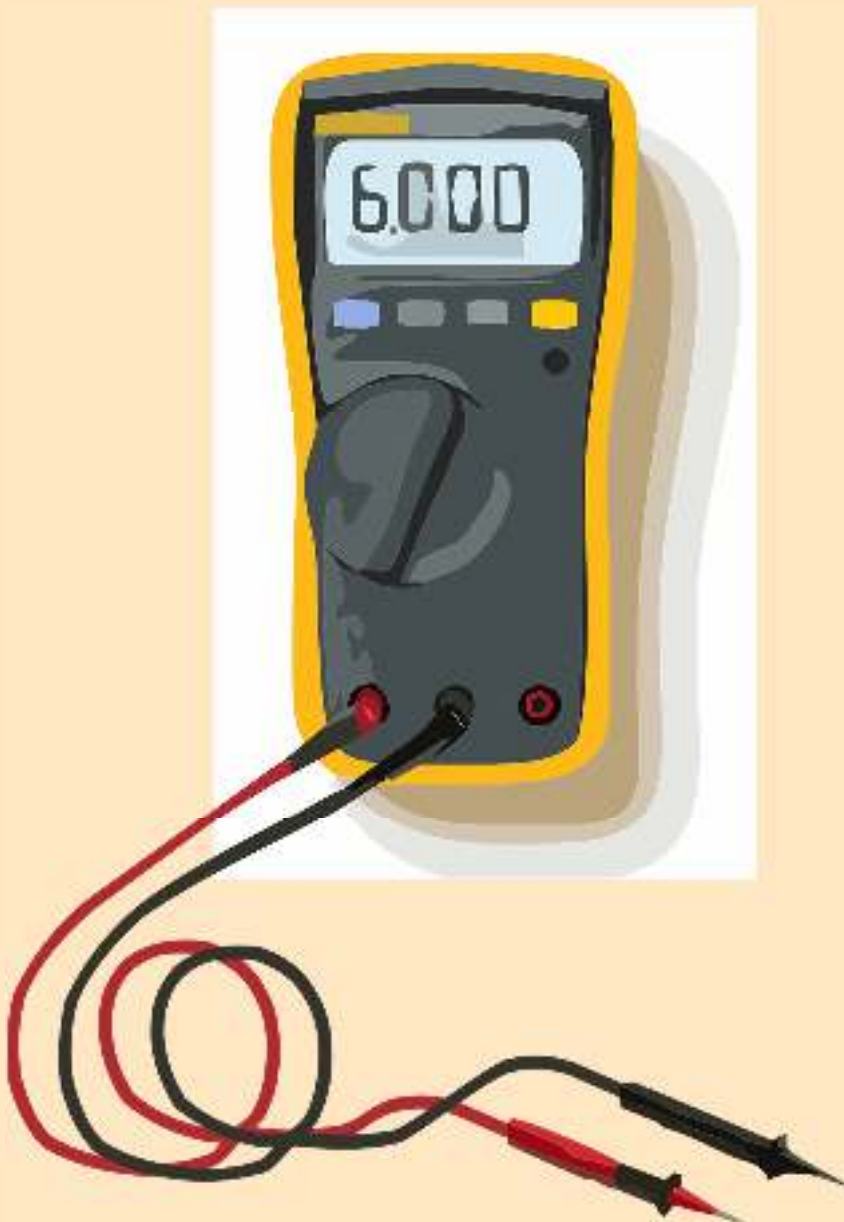
Voltage Regulator

DC Power Supply



Introduction of Voltage Regulator

A voltage regulator is a system designed to automatically maintain a constant voltage.



Source: pixabay

Function of Voltage Regulator

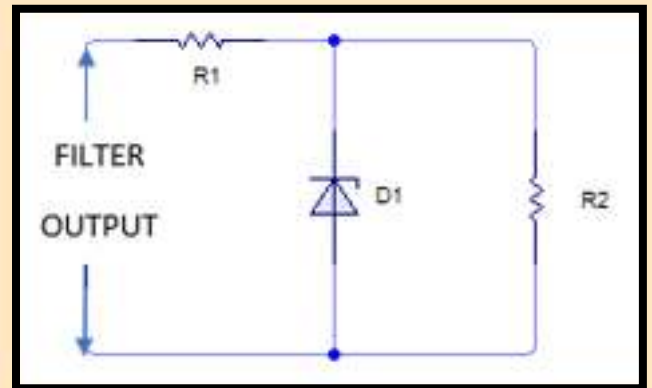
To ensure the output voltage to remain constant whether the current load changes or there are fluctuations in the input AC voltage.



Source: Canva

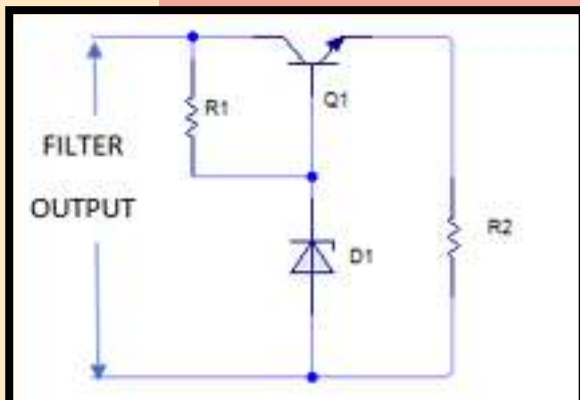
Types of Voltage Divider

Zener Diode
Voltage
Regulator

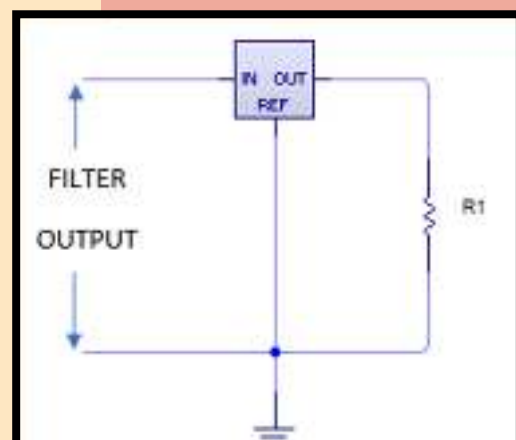


TYPES OF FILTER

Transistor Series
Voltage
Regulator



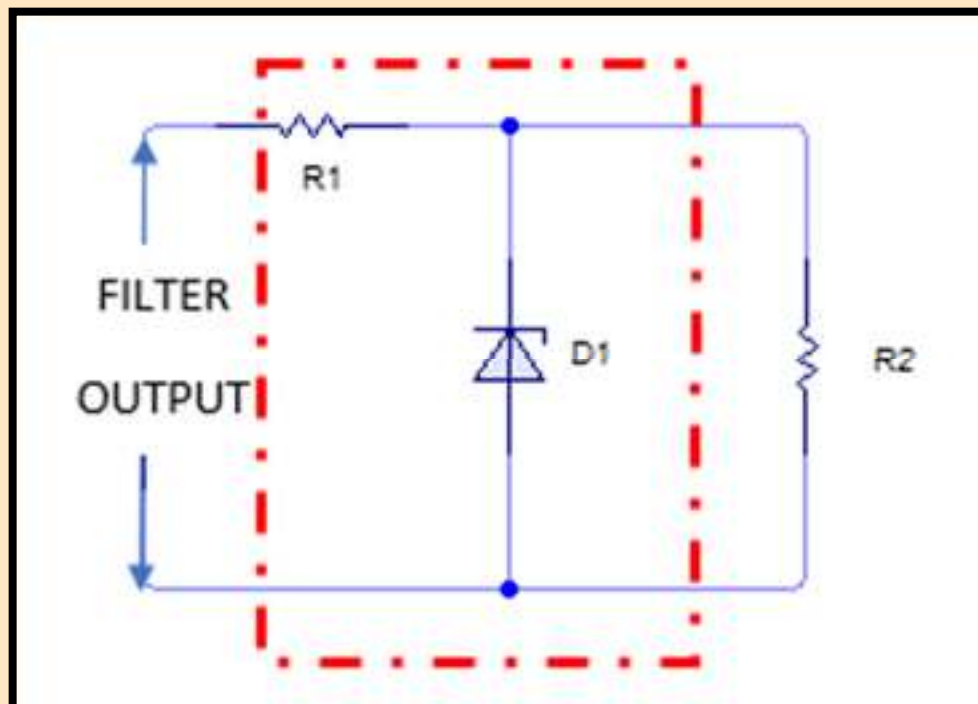
IC Voltage
Regulator



Types of Voltage Divider

Zener Diode Voltage Regulator

A zener diode is connected parallel with load resistor to make it reverse bias.

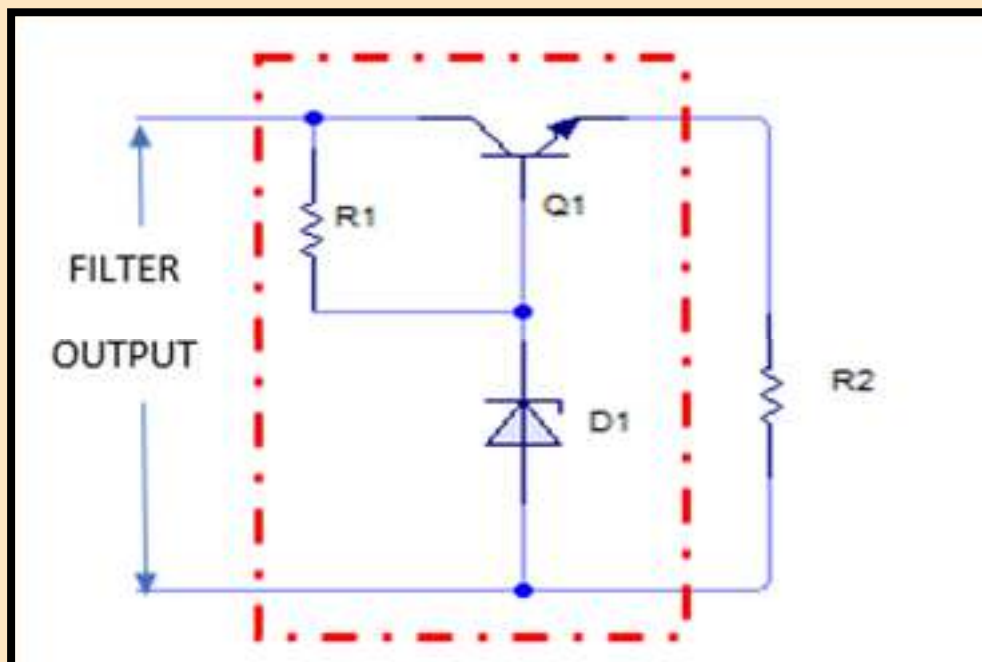


Types of Voltage Divider

Transistor Series Voltage Regulator



This regulator has a transistor in series with Zener diode and both in parallel to the load.


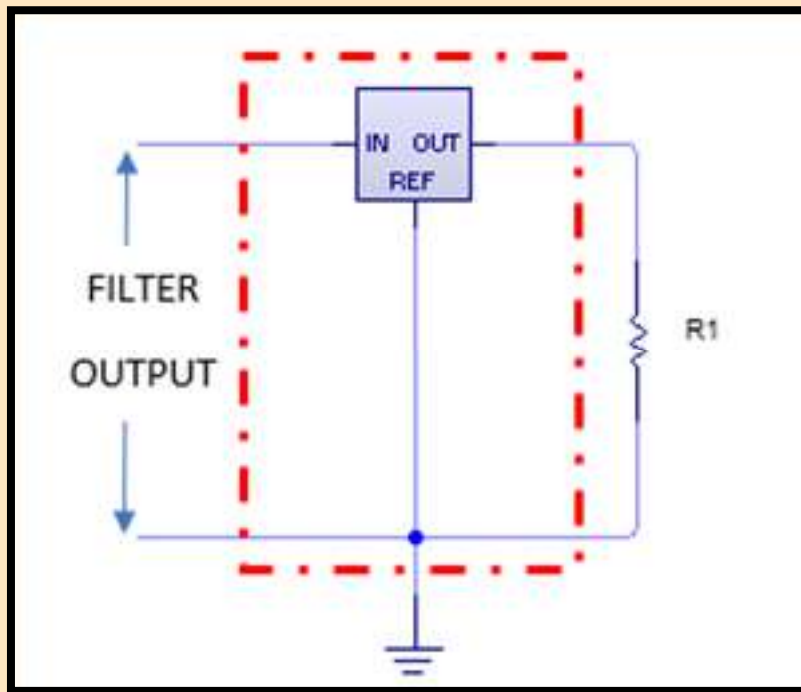


Types of Voltage Divider

Integrated Circuit Voltage Regulator



IC voltage regulators has three-terminal components.



Types of Voltage Divider

Integrated Circuit Voltage Regulator

TYPES

- ✓ Fixed positive voltage regulator
- ✓ Fixed negative voltage regulator

Types of Voltage Divider

Integrated Circuit Voltage Regulator

Fixed positive voltage regulator

78XX

The **78XX** series of regulators are used to supply a positive output voltage, with the last two digits specifying the output voltage.

For example :

7805 = +5V

7810 = +10V

Types of Voltage Divider

Integrated Circuit Voltage Regulator



Fixed positive voltage regulator

type number	output voltage (V)	minimum input voltage (V)
7805	+5	+7.3
7806	+6	+8.3
7808	+8	+10.5
7810	+10	+12.5
7812	+12	+14.5
7815	+15	+17.7
7818	+18	+21.0
7824	+24	+27.1

Types of Voltage Divider

Integrated Circuit Voltage Regulator

Fixed negative voltage regulator

79XX

The 79XX series of regulators are used to supply a negative output voltage, with the last two digits specifying the output voltage.

For example :

7905 = -5V

7912 = -12V

Types of Voltage Divider



Integrated Circuit Voltage Regulator

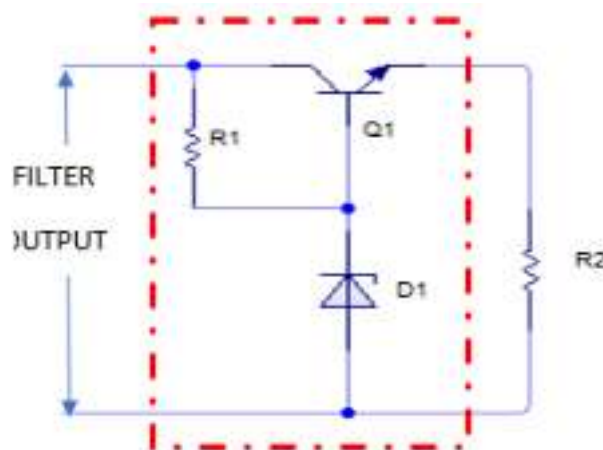
Fixed negative voltage regulator

type number	output voltage (V)	minimum input voltage (V)
7905	-5	-7.3
7906	-6	-8.4
7908	-8	-10.5
7909	-9	-11.5
7912	-12	-14.6
7915	-15	-17.7
7918	-18	-20.8
7924	-24	-27.1

1. List THREE (3) types of voltage regulator.
2. By using the diagram, explain the transistor series regulator.
3. Explain the function of voltage regulator.
4. Draw the input and output waveforms of voltage regulator.
5. Explain the output of LM7912 and LM7809.


1. THREE (3) types of voltage regulator is Zener Diode Voltage Regulator, Transistor Series Voltage Regulator and IC voltage regulator
2. The transistor series regulator.

This regulator has a transistor in series with Zener diode and both in parallel to the load.



3. The function of a voltage regulator is to ensure the output voltage to remain constant whether the current load changes or there are fluctuations in the input AC voltage.

4. The input and output waveforms of a voltage regulator.



5. The output of LM7912 is -12V and LM7809 is +9V



Block 5



Voltage Divider

DC Power Supply



Introduction of Voltage Divider

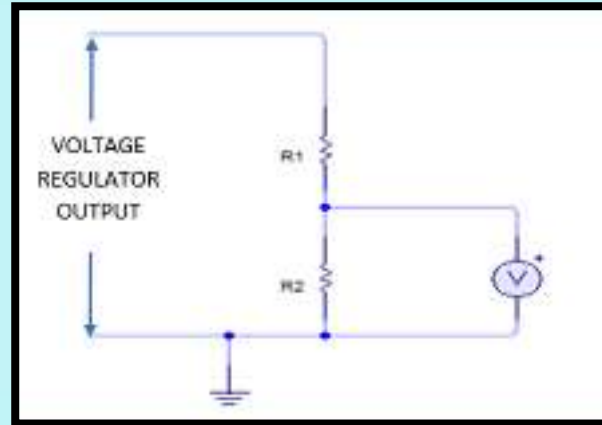
A voltage divider is a simple circuit that can reduce voltage.

Function of Voltage Divider

- To scale down input voltage to a smaller voltage based on the ratio of the 2 resistors.
- Usually consists of resistors that are connected in series

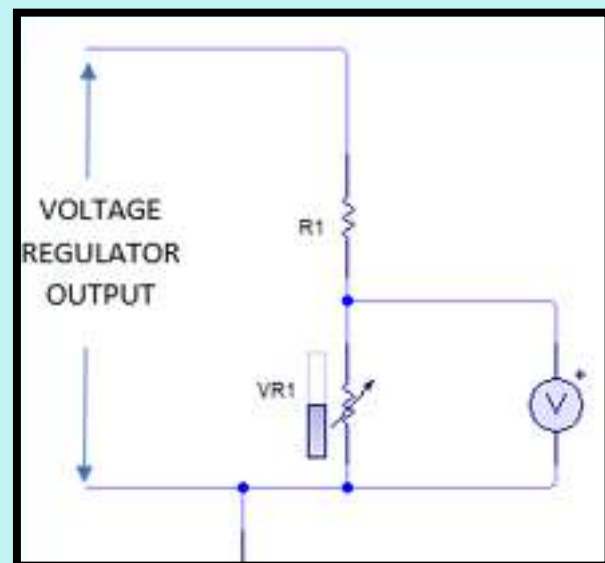
Types of Voltage Divider

Fixed Voltage
Divider



TYPES OF VOLTAGE DIVIDER

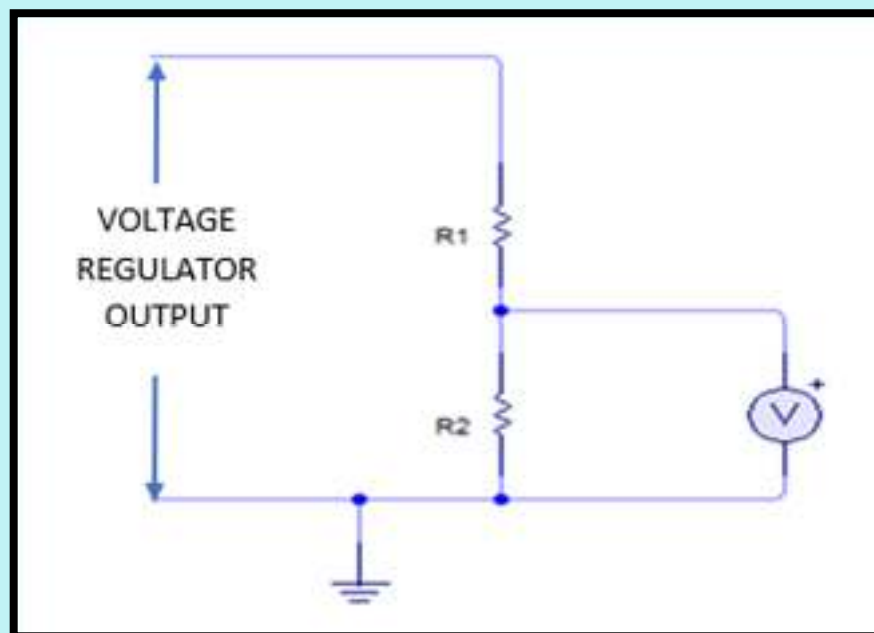
Variable Voltage
Divider



Types of Voltage Divider

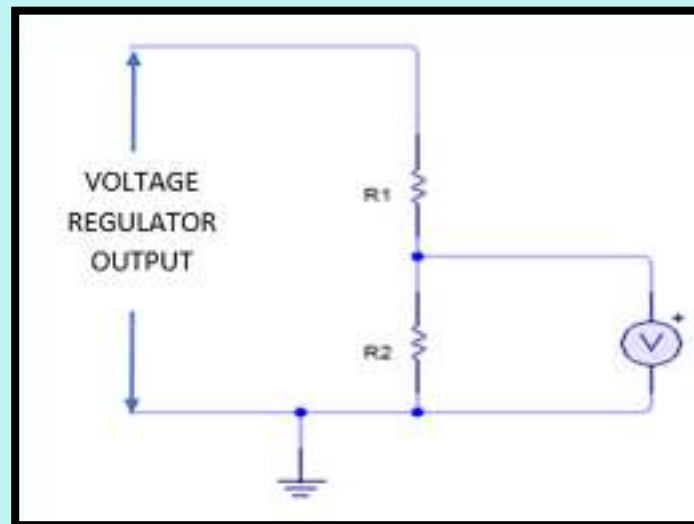
Fixed Voltage Divider

Consists of TWO resistors connected in series.



Types of Voltage Divider

Fixed Voltage Divider



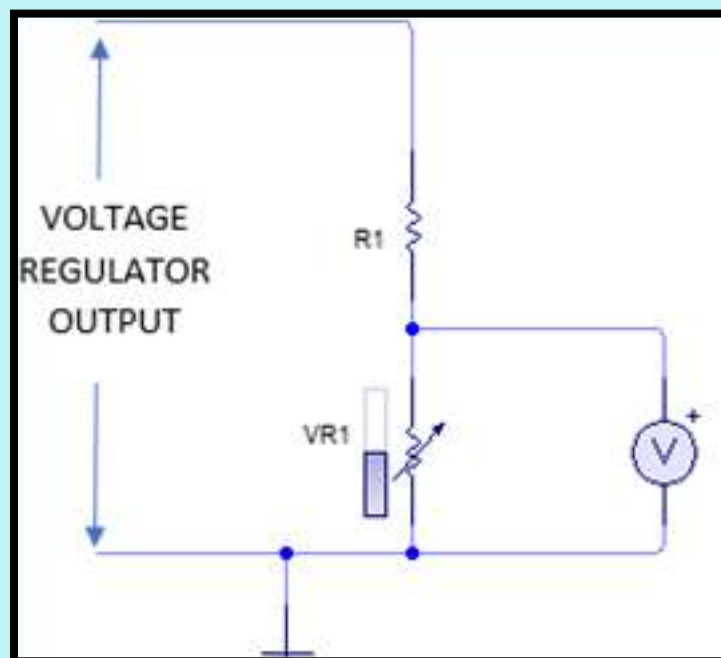
$$V_{R1} = \frac{R_1}{R_1 + R_2} (V_{IN})$$

$$V_{R2} = \frac{R_2}{R_1 + R_2} (V_{IN})$$

Types of Voltage Divider

Variable Voltage Divider

Consists of one resistor and variable resistor connected in series.



QUESTION



Video simulation DC power supply

<https://youtu.be/es2YP9aO6xc>



References

Floyd, Thomas L. (2007). Principles of Electric Circuits Electron Flow Version 8th Edition. Prentice Hall

Vodovozov, Valery.(2010). Introduction to Electronic Engineering. Valery Vodovozov & Ventus Publishing ApS

V.K. Mehta, Rohit Mehta. (2008).Principles of Electronics. S Chand & Company

Nee, L. Y., Ahmad, A. A., Masriani, M., & Naagajoothi, A. N. (2020). Electronic Circuit. Selangor: Oxford Fajar

T.Paynter, R., & B.J.Toby, B. (2009). Electronics Technology Fundamentals. Pearson Education

Basic DC Power Supply

Unlock the essentials of DC power supply design with this comprehensive e-book, "Basic DC Power Supply." Structured around five core components—Transformer, Rectifier, Filter, Regulator, and Voltage Divider—this guide demystifies the intricacies of power supply circuits.

With clear, accessible text and thoughtfully curated illustrations, readers will find a user-friendly resource that enhances understanding and retention. Whether you're a student diving into electronics or a curious reader seeking to grasp the fundamentals, this e-book serves as an invaluable tool.

Join us on a journey to master the principles of DC power supplies and empower your knowledge for practical applications in electronics!

Norhafiza Binti Sharom

Fauziah Binti Aliman

Lian Ai Chen

Politeknik Malaysia